

Spring Test 7

Questions, Answers and Topic Information

Read the following instructions or press 'play' ► and listen to the instructions being read from the CD-ROM.


Listen carefully to the instructions I am going to give you. When I have finished reading them, I will answer any questions. You will not be able to ask any questions once the test has begun.

I am going to ask you 20 questions. On your sheet there is an answer box for each question, where you should write the answer to the question and nothing else. You should work out the answer to each question in your head, but you may jot things down outside the answer box if this helps you. Do not try to write down your working because this will waste time and you may miss the next question. For some of the questions, important information is already written down for you on the answer sheet.




I will read each question twice. Listen carefully both times. You will then have time to work out your answer. If you cannot work out an answer, put a cross in the answer box. If you make a mistake, cross out the wrong answer and write the correct one next to it. There are some easy and some harder questions, so do not be put off if you cannot answer a question.

Now pause, or press 'pause' ■■ on your CD player or computer. Ask the children if they have any questions. Once you have answered all the questions, read out the following instructions. Alternatively, play the audio recording from the CD-ROM.

► Now we are ready to start the test.

	Answer	Topic
For this group of questions you will have 5 seconds to work out each answer and write it down.		
1 Write the number one thousand and three in digits.	1003	NPV
2 Look at your answer sheet. What is the total of the coins?	£1.65	AS/M
3 Multiply eight by eleven.	88	MD
4 What is nine less than sixty?	51	AS
5 Look at your answer sheet. Write the missing number.	2.11	NPV/Dc
6 Subtract twenty-three from fifty-four.	31	AS
7 What is the sum of eight thousand and fourteen thousand?	22 000	AS
8 How many days are there in March?	31	M
9 Write the number that has three units, four hundreds and two tens.	423	NPV
10 Look at your answer sheet. Tick the quadrilateral.		PS

For this group of questions you will have 10 seconds to work out each answer and write it down.

11 Look at your answer sheet. Tick the isosceles triangle.		PS
12 Look at your answer sheet. What does the string measure to the nearest centimetre?	14 cm	M
13 Look at your answer sheet. Colour one-quarter of the shape.		F
14 Look at your answer sheet. Circle the arrow after it has made a quarter turn clockwise.		PD
15 Multiply four, two and six.	48	MD
16 How many metres are there in three and a half kilometres?	3500 m	M
17 Class A take fourteen minutes to perform their show and Class B take seventeen minutes to perform theirs. How long do the shows take altogether?	31 minutes	AS/M
18 Look at your answer sheet. How much more does a scanner cost than a printer?	£18	AS/M
19 Look at your answer sheet. What is the missing number?	3.2	NPV/Dc
20 Look at your answer sheet. Circle the multiples of four.	72 and 76	MD

Now put down your pen or pencil. The test is finished.