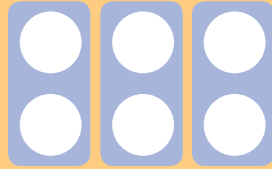


Number Shape Multiplication 2x Tables


I can write multiplication statements using the multiplication and equals signs.

For each image, write the multiplication fact shown.

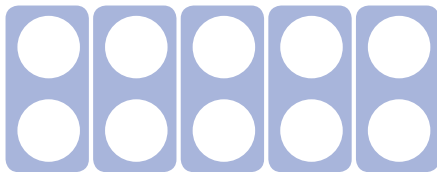
For example:



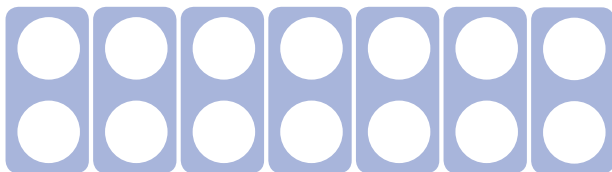
$$3 \times 2 = 6$$



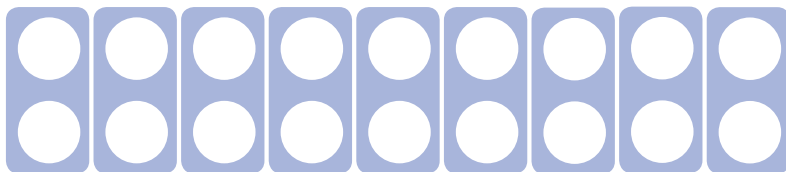
$$\square \times \square = \square$$



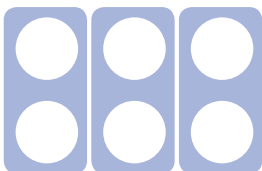
$$\square \times \square = \square$$



$$\square \times \square = \square$$



$$\square \times \square = \square$$



$$\square \times \square = \square$$


Challenge:

Jayne says, “ 5×2 is the same as 2×5 .”


Is she correct?

Use your number shapes to show how you know.


Answers




$$4 \times 2 = 8$$



$$5 \times 2 = 10$$



$$7 \times 2 = 14$$



$$9 \times 2 = 18$$



$$3 \times 2 = 6$$

Challenge:

She is correct.

Children might line up five of the 2 number shapes and two of the 5 number shapes to show the equality.