








Spring Test 3



Name: _____ Class: _____ Date: _____

| | | | | |
|----|--|---|---|---|
| 1 | | | | |
| 2 | | 20 | 7 | |
| 3 | | | | |
| 4 | <div><div>25</div><div></div><div></div><div></div><div></div><div></div><div>30</div></div> | | | |
| 5 | | | | |
| 6 | | 2 | 5 | 4 |
| 7 | | 6 | 18 | |
| 8 | $20 + 3$ | $20 + 13$ | $30 + 2$ | $30 + 12$ |
| 9 |  |  |  |  |
| 10 | |  |  |  |

Which questions did you get right? Colour them in.

| | | | | | | | | | |
|-------------------------|------------------------|------------------------|-------------------------|------------------------|------------------------|------------------------|-------------------------|------------------------|------------------------|
| 1 <small>NPV</small> | 2 <small>AS</small> | 3 <small>MD</small> | 4 <small>NPV</small> | 5 <small>PD</small> | 6 <small>AS</small> | 7 <small>AS</small> | 8 <small>NPV</small> | 9 <small>PS</small> | 10 <small>F</small> |
|-------------------------|------------------------|------------------------|-------------------------|------------------------|------------------------|------------------------|-------------------------|------------------------|------------------------|

| | |
|-------------|-----|
| Total marks | /10 |
|-------------|-----|